




Name: \_\_\_\_\_ Date: \_\_\_\_\_ Class: \_\_\_\_\_


## Identifying the Fraction

Identify the fractions by coloring in the correct number of objects.  
The first one is done for you.

1. Color in  $\frac{1}{4}$  of the group of hats Red



2. Color in  $\frac{4}{5}$  of the star Yellow



3. Color in  $\frac{2}{5}$  of the group of snowflakes Blue



4. Color in  $\frac{1}{4}$  of the group of ornaments Green






Name: \_\_\_\_\_ Date: \_\_\_\_\_ Class: \_\_\_\_\_


## Identifying the Fraction

Identify the fractions by coloring in the correct number of objects.  
The first one is done for you.

1. Color in  $\frac{1}{4}$  of the group of hats Red



2. Color in  $\frac{4}{5}$  of the star Yellow



3. Color in  $\frac{2}{5}$  of the group of snowflakes Blue



4. Color in  $\frac{1}{4}$  of the group of ornaments Green

